

Name : _____

Score : _____

Teacher : _____

Date : _____

$$\begin{array}{r} 27 \\ - 11 \\ \hline \end{array}$$

$$\begin{array}{r} 84 \\ - 44 \\ \hline \end{array}$$

$$\begin{array}{r} 80 \\ - 31 \\ \hline \end{array}$$

$$\begin{array}{r} 79 \\ - 19 \\ \hline \end{array}$$

$$\begin{array}{r} 43 \\ - 30 \\ \hline \end{array}$$

$$\begin{array}{r} 42 \\ - 28 \\ \hline \end{array}$$

$$\begin{array}{r} 61 \\ - 6 \\ \hline \end{array}$$

$$\begin{array}{r} 93 \\ - 19 \\ \hline \end{array}$$

$$\begin{array}{r} 74 \\ - 63 \\ \hline \end{array}$$

$$\begin{array}{r} 82 \\ - 44 \\ \hline \end{array}$$

$$\begin{array}{r} 88 \\ - 4 \\ \hline \end{array}$$

$$\begin{array}{r} 40 \\ - 29 \\ \hline \end{array}$$

$$\begin{array}{r} 86 \\ - 1 \\ \hline \end{array}$$

$$\begin{array}{r} 53 \\ - 21 \\ \hline \end{array}$$

$$\begin{array}{r} 78 \\ - 22 \\ \hline \end{array}$$

$$\begin{array}{r} 76 \\ - 45 \\ \hline \end{array}$$

$$\begin{array}{r} 89 \\ - 9 \\ \hline \end{array}$$

$$\begin{array}{r} 47 \\ - 27 \\ \hline \end{array}$$

$$\begin{array}{r} 65 \\ - 24 \\ \hline \end{array}$$

$$\begin{array}{r} 75 \\ - 50 \\ \hline \end{array}$$

$$\begin{array}{r} 95 \\ - 83 \\ \hline \end{array}$$

$$\begin{array}{r} 48 \\ - 47 \\ \hline \end{array}$$

$$\begin{array}{r} 73 \\ - 24 \\ \hline \end{array}$$

$$\begin{array}{r} 81 \\ - 11 \\ \hline \end{array}$$

$$\begin{array}{r} 40 \\ - 16 \\ \hline \end{array}$$



Name : _____

Score : _____

Teacher : _____

Date : _____

$$\begin{array}{r} 7 \\ + 82 \\ \hline \end{array}$$

$$\begin{array}{r} 73 \\ + 22 \\ \hline \end{array}$$

$$\begin{array}{r} 82 \\ + 30 \\ \hline \end{array}$$

$$\begin{array}{r} 97 \\ + 48 \\ \hline \end{array}$$

$$\begin{array}{r} 89 \\ + 14 \\ \hline \end{array}$$

$$\begin{array}{r} 10 \\ + 79 \\ \hline \end{array}$$

$$\begin{array}{r} 70 \\ + 11 \\ \hline \end{array}$$

$$\begin{array}{r} 48 \\ + 37 \\ \hline \end{array}$$

$$\begin{array}{r} 24 \\ + 26 \\ \hline \end{array}$$

$$\begin{array}{r} 35 \\ + 32 \\ \hline \end{array}$$

$$\begin{array}{r} 25 \\ + 3 \\ \hline \end{array}$$

$$\begin{array}{r} 14 \\ + 64 \\ \hline \end{array}$$

$$\begin{array}{r} 99 \\ + 44 \\ \hline \end{array}$$

$$\begin{array}{r} 13 \\ + 20 \\ \hline \end{array}$$

$$\begin{array}{r} 84 \\ + 7 \\ \hline \end{array}$$

$$\begin{array}{r} 54 \\ + 6 \\ \hline \end{array}$$

$$\begin{array}{r} 33 \\ + 93 \\ \hline \end{array}$$

$$\begin{array}{r} 32 \\ + 29 \\ \hline \end{array}$$

$$\begin{array}{r} 21 \\ + 34 \\ \hline \end{array}$$

$$\begin{array}{r} 56 \\ + 68 \\ \hline \end{array}$$

$$\begin{array}{r} 81 \\ + 45 \\ \hline \end{array}$$

$$\begin{array}{r} 58 \\ + 21 \\ \hline \end{array}$$

$$\begin{array}{r} 1 \\ + 58 \\ \hline \end{array}$$

$$\begin{array}{r} 92 \\ + 49 \\ \hline \end{array}$$

$$\begin{array}{r} 40 \\ + 85 \\ \hline \end{array}$$

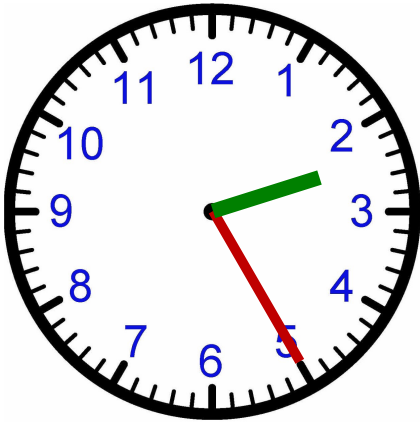
Name : _____

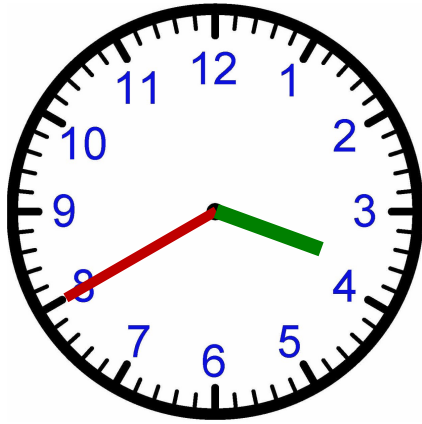
Score : _____

Teacher : _____

Date : _____

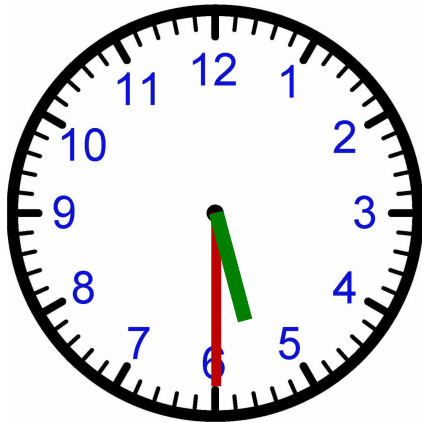
What Time Is It ?

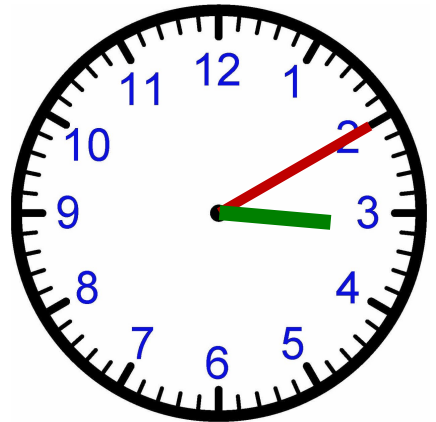






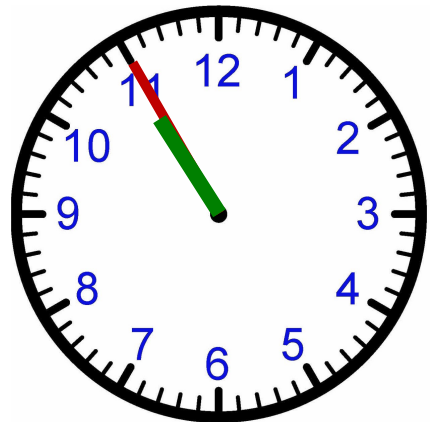














Name : _____

Score : _____

Teacher : _____

Date : _____

Write the Correct Comparison Symbol ($>$, $<$ or $=$) in Each Box

1) 



2) 



3) 



4) 



5) 



6) 



7) 



8) 



9) 



10) 





Name : _____

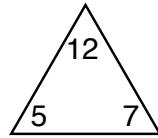
Score : _____

Teacher : _____

Date : _____

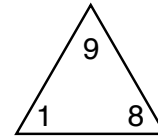
Complete Each Family of Facts

1)



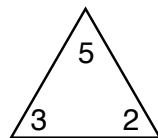
$$\begin{array}{r} \square + \square = \square \\ \square + \square = \square \\ \square - \square = \square \\ \square - \square = \square \end{array}$$

4)



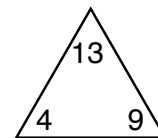
$$\begin{array}{r} \square + \square = \square \\ \square + \square = \square \\ \square - \square = \square \\ \square - \square = \square \end{array}$$

2)



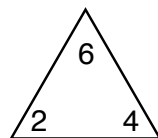
$$\begin{array}{r} \square + \square = \square \\ \square + \square = \square \\ \square - \square = \square \\ \square - \square = \square \end{array}$$

5)



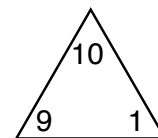
$$\begin{array}{r} \square + \square = \square \\ \square + \square = \square \\ \square - \square = \square \\ \square - \square = \square \end{array}$$

3)



$$\begin{array}{r} \square + \square = \square \\ \square + \square = \square \\ \square - \square = \square \\ \square - \square = \square \end{array}$$

6)



$$\begin{array}{r} \square + \square = \square \\ \square + \square = \square \\ \square - \square = \square \\ \square - \square = \square \end{array}$$

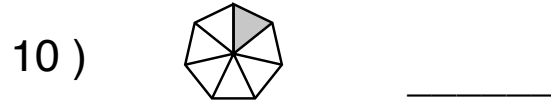
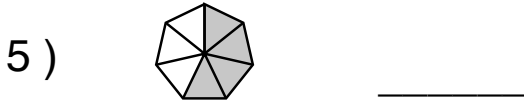
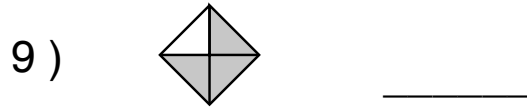
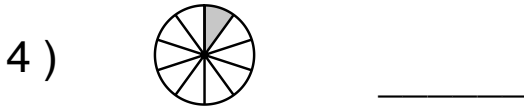
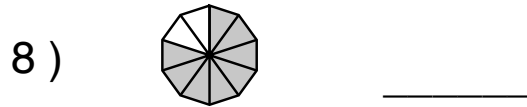
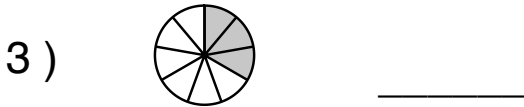
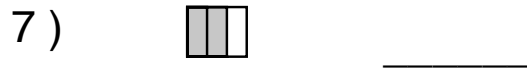
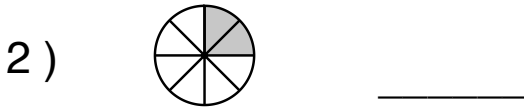
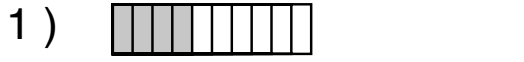
Name : _____

Score : _____

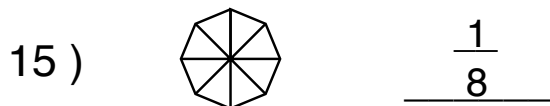
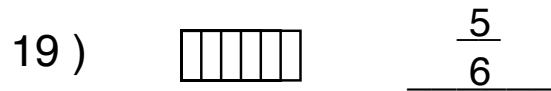
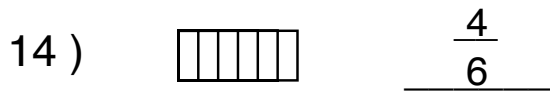
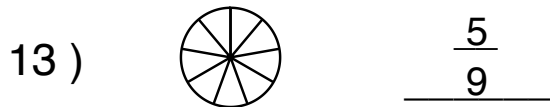
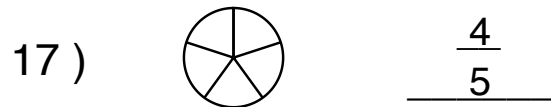
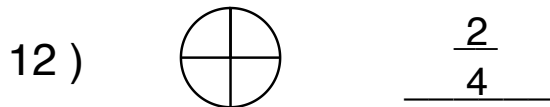
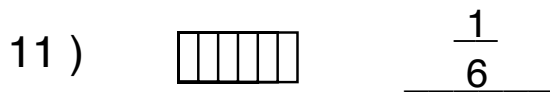
Teacher : _____

Date : _____

What is the Fraction of the Shaded Area ?



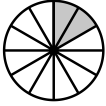
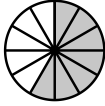
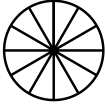
Shade the Figure with the Indicated Fraction.

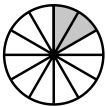
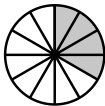
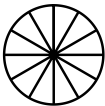


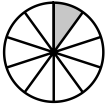
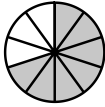
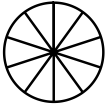
Name : _____ Score : _____

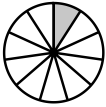
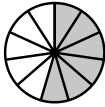

Teacher : _____ Date : _____

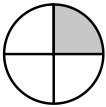
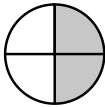
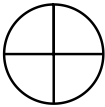
Visually Adding Simple Fractions

1)  +  = 
 $\frac{2}{12} + \frac{7}{12} =$ _____

2)  +  = 
 $\frac{2}{12} + \frac{4}{12} =$ _____

3)  +  = 
 $\frac{1}{10} + \frac{7}{10} =$ _____

4)  +  = 
 $\frac{1}{11} + \frac{6}{11} =$ _____

5)  +  = 
 $\frac{1}{4} + \frac{2}{4} =$ _____